

Please write clearly in block capitals.

Centre number

--	--	--	--	--

Candidate number

--	--	--	--

Surname

Forename(s)

Candidate signature

A-level BIOLOGY

Paper 3

Monday 18 June 2018

Morning

Time allowed: 2 hours

Materials

For this paper you must have:

- a ruler with millimetre measurements
- a scientific calculator.

Instructions

- Use black ink or black ball-point pen.
- Fill in the boxes at the top of this page.
- Answer **all** questions in **Section A**.
- Answer **one** question from **Section B**.
- You must answer the questions in the space provided. Do not write outside the box around each page or on blank pages.
- Show all your working.
- Do all rough work in this book. Cross through any work you do not want to be marked.

Information

- The marks for the questions are shown in brackets.
- The maximum mark for this paper is 78.

For Examiner's Use	
Question	Mark
1	
2	
3	
4	
5	
6	
7	
TOTAL	



Section A

Answer **all** questions in this section.

You are advised to spend no more than one hour and 15 minutes on this section.

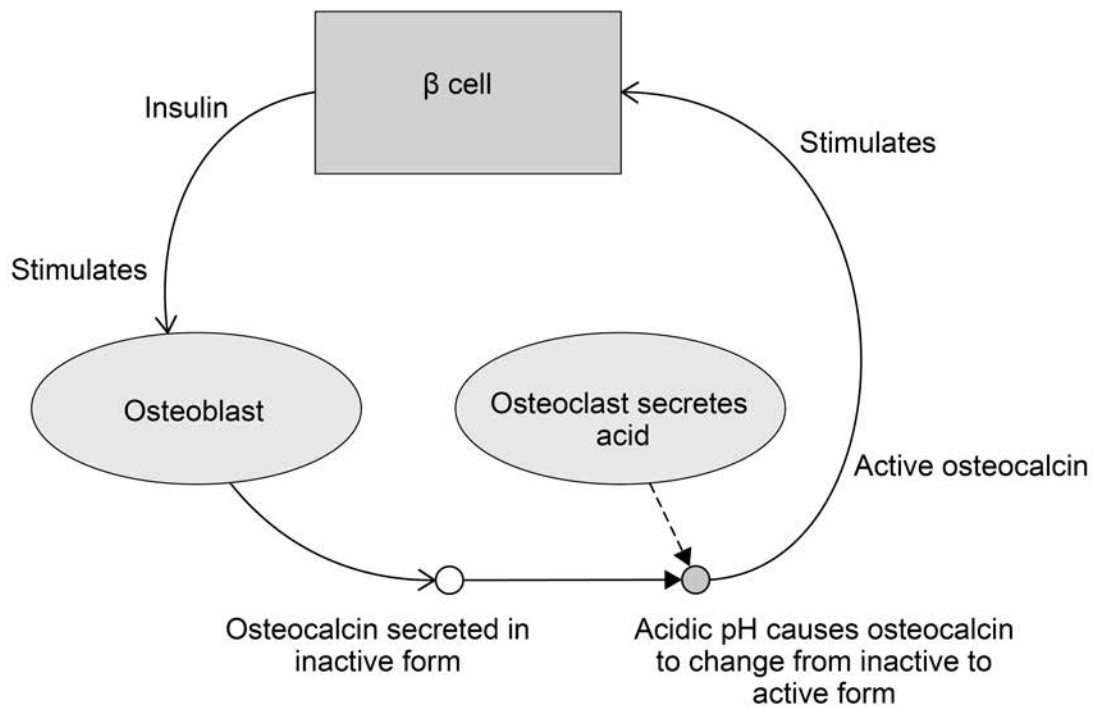
0 1

Broken bones are repaired by cells called osteoclasts and osteoblasts.

Osteoblasts secrete a hormone called osteocalcin in an inactive form. Osteocalcin is a protein. The active form of osteocalcin binds to a receptor on beta (β) cells in the pancreas, stimulating them to release insulin. Osteoblasts have receptors for insulin.

Figure 1 shows how the production of osteocalcin by osteoblasts is controlled by positive feedback.

Figure 1



0 1 . 1

The secretion of osteocalcin (in an inactive form) by osteoblasts is controlled by positive feedback.

Use information from **Figure 1** to explain why this is positive feedback.

[2 marks]

0 1 . 2

The acidic pH conditions created by osteoclasts cause the inactive form of the protein osteocalcin to change into the active form of osteocalcin.

Suggest how.

[2 marks]

Turn over ►



There are no questions on this page

Turn over for the next question

**DO NOT WRITE ON THIS PAGE
ANSWER IN THE SPACES PROVIDED**

Turn over ►



0 2

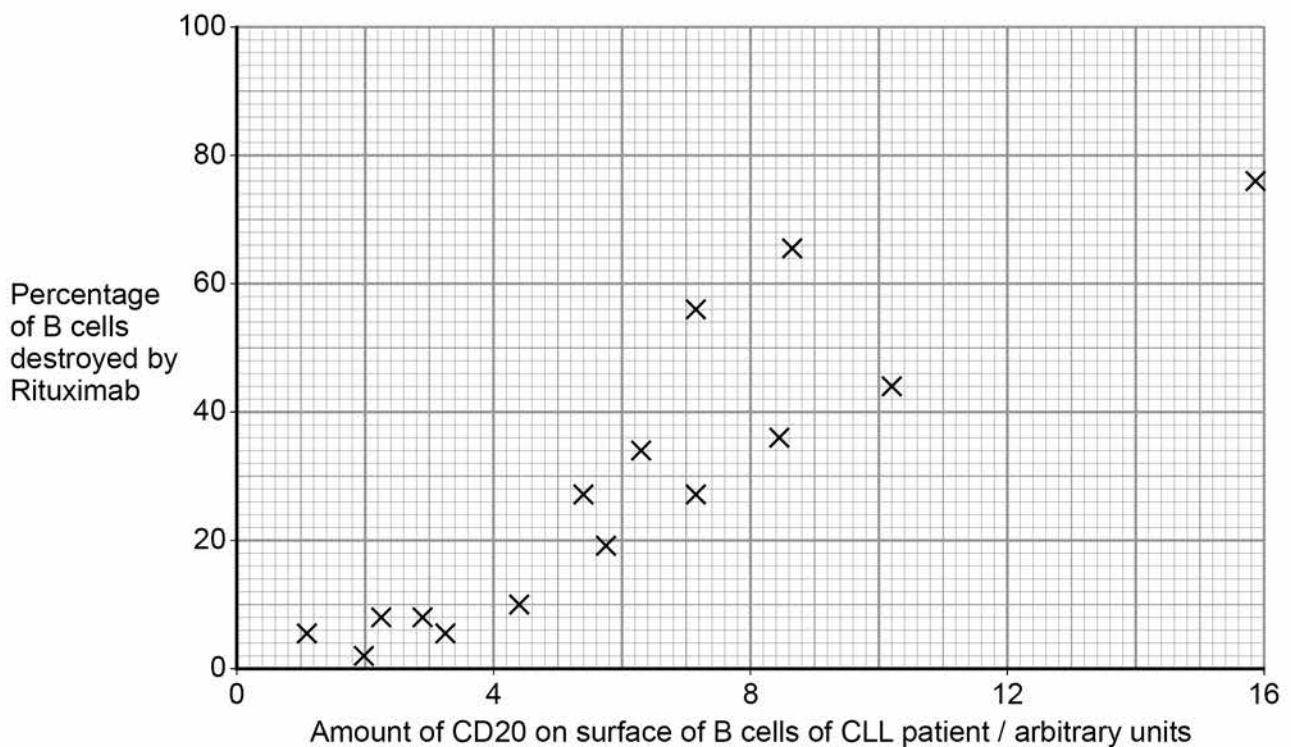
Chronic lymphocytic leukaemia (CLL) is a cancer that affects some B cells of a person's immune system.

Rituximab is a drug used to treat CLL. It binds to a protein called CD20 on the surface of B cells. If enough Rituximab binds to a B cell, it can kill the cell. Rituximab kills **both** healthy **and** cancerous B cells. The body then produces new B cells.

The amount of CD20 on the surface of B cells varies from one person to another. Doctors investigated the relationship between the amount of CD20 on the B cells of a patient and the percentage of B cells destroyed by Rituximab.

Figure 2 shows the doctors' results. Each cross is the result for one patient.

Figure 2



0 2 . 1

What statistical test could the scientists have used to determine whether there was a significant relationship between the amount of CD20 on the surface of B cells and the percentage of B cells destroyed by Rituximab?

Give a reason for your answer.

[1 mark]

Name of test _____

Reason _____



Approximately 11 percent of people with CLL also have mutations of a gene called *NOTCH1*. This leads to production of a non-functional transcription factor associated with CD20 production.

The doctors determined the median percentage of B cells destroyed by Rituximab in people with CLL who had the *NOTCH1* mutation and those who did not.

The doctors' results are shown in **Table 1**.

Table 1

	Median percentage of B cell destroyed by Rituximab
In people with CLL who had the <i>NOTCH1</i> mutation	4
In people with CLL who did not have <i>NOTCH1</i> mutation	22

0 2 . 3 Human blood contains (approximately) 1.0×10^9 B cells per dm^3 .

Use the median values in **Table 1** to calculate the difference between the number of B cells per dm^3 in the blood of people treated with Rituximab with the *NOTCH1* mutation and people without the *NOTCH1* mutation.

Express your answer in standard form. Show your working.

[2 marks]

_____ cells per dm^3

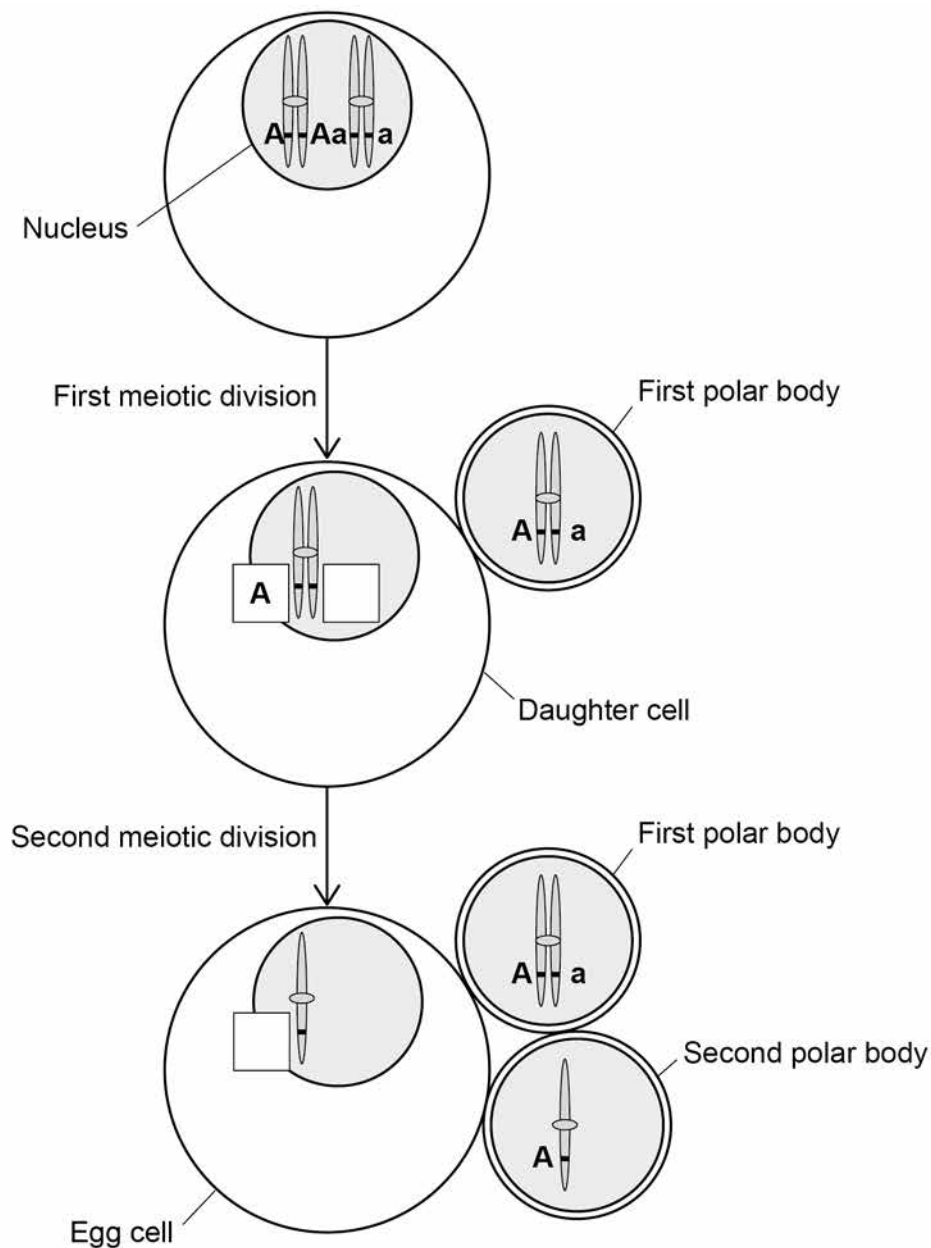


0 3

In women, the first division of meiosis produces one daughter cell that has almost all of the cytoplasm. The other daughter cell consists of a nucleus surrounded by a very small amount of cytoplasm and a cell-surface membrane. This very small daughter cell is called a polar body. Polar bodies do not usually divide. The same process occurs in the second division of meiosis, resulting in one egg cell and two polar bodies.

The diagram in **Figure 3** shows the formation of an egg cell and two polar bodies during meiosis. It also shows what happens to one pair of homologous chromosomes. This pair carries two alleles of gene A.

Figure 3



0 3 . 1 Complete **Figure 3** by putting **A** or **a** in the boxes. One box has been completed for you with **A**.

[1 mark]

0 3 . 2 Put a tick (✓) in the box next to the name of the process that produced the combination of alleles on the chromosome in the first polar body in **Figure 3**.

[1 mark]

Anaphase

Crossing over

Independent assortment

Semi-conservative replication

0 3 . 3 A scientist measured the diameter of a polar body and the diameter of the nucleus inside it. The diameter of the polar body was 10.4 μm and the diameter of the nucleus was 7.0 μm . The density of mitochondria in the cytoplasm of the polar body (outside of the nucleus) was 0.08 mitochondria per μm^3 .

Calculate the number of mitochondria in the polar body. You should assume polar bodies and nuclei are spherical.

The formula for the volume of a sphere is $\frac{4}{3}\pi r^3$ where $\pi = 3.14$

Show your working.

[2 marks]

Number of mitochondria = _____

Turn over ►



There are no questions on this page

**DO NOT WRITE ON THIS PAGE
ANSWER IN THE SPACES PROVIDED**

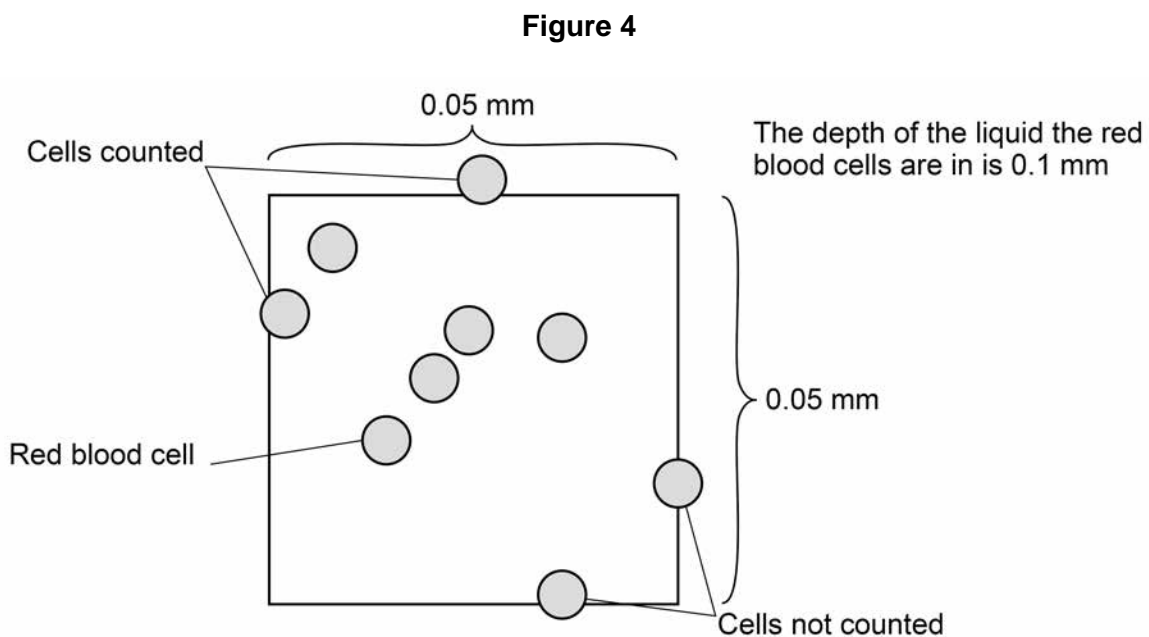


A haemocytometer is a special microscope slide which can be used to count the numbers of blood cells in a sample of blood.

- The surface of the slide has many small, equal-sized squares marked on it.
- The depth of the liquid under each square is 0.1 mm
- When counting, cells that touch top or left lines are counted but cells that touch right or bottom lines are not counted.

A doctor used a haemocytometer to determine the number of red blood cells per mm^3 in a blood sample. He diluted the original blood sample by a factor of 200 times before putting some on a haemocytometer.

Figure 4 shows the distribution of cells in a typical small square.



0 4 . 2

The doctor counted the red blood cells in many small squares.
The **mean** number of red blood cells per small square was 7
The original blood sample was diluted by a factor of 200 times.

Calculate the number of red blood cells per mm^3 in the original blood sample.
Give your answer in standard form.

[2 marks]Answer = _____ red blood cells per mm^3

0 4 . 3

When counting, cells that touch top or left lines are counted but cells that touch right or bottom lines **are not** counted.

Suggest **two** reasons for this rule.

[2 marks]

1

2

Turn over ►

The doctor also wanted to know how many white blood cells per mm^3 there were in a different sample of blood. To do this he first diluted the sample by a factor of 20 times. He then made the white blood cells clearly visible by using a stain that makes nuclei appear dark blue.

0 4 . 4

When counting white blood cells, the doctor only diluted the blood sample by a factor of 20 times, instead of 200 times when counting red blood cells.

Suggest why he only diluted the sample by a factor of 20 times.

[1 mark]

0 4 . 5

Explain how the stain allowed the doctor to count the white blood cells amongst all the red blood cells.

[1 mark]

8



There are no questions printed on this page

Turn over for the next question

**DO NOT WRITE ON THIS PAGE
ANSWER IN THE SPACES PROVIDED**

Turn over ►



0 5

Scientists investigated the role of a protein called CENP-W in mitosis. Their method involved cell fractionation and ultracentrifugation.

0 5 . 1

The scientists began by lysing (breaking open) cells and organelles using a detergent that dissolves lipids in water.

Suggest how the detergent releases CENP-W from cells.

[2 marks]

0 5 . 2

Explain how ultracentrifugation separates CENP-W from other molecules.

[2 marks]



0 6

Ammonia in soil is oxidised to nitrites and nitrates by species of nitrifying bacteria.

Scientists investigated whether two soils with a different pH contained different communities of nitrifying bacteria. These communities consist of all the nitrifying bacteria of different species in each soil. They took samples of soil from two sites, **A** and **B**.

They measured the pH of the samples and found that

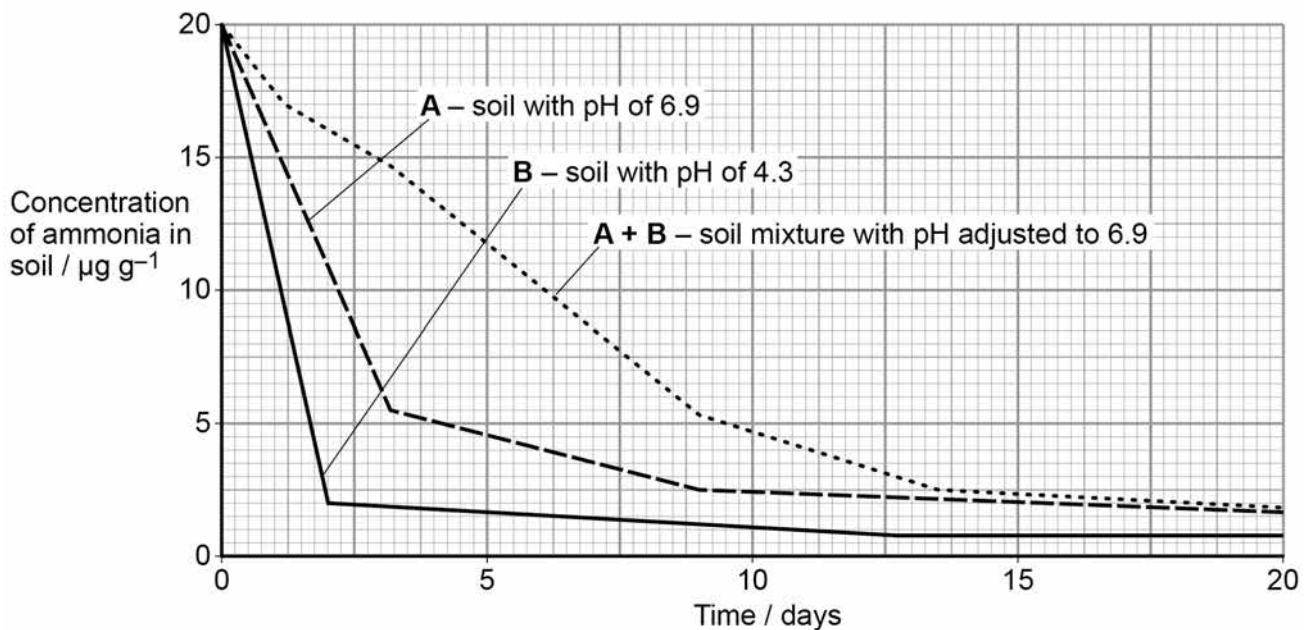
- the soil from site **A** had a pH of 6.9
- the soil from site **B** had a pH of 4.3

The scientists measured the concentration of ammonia in soil samples over 20 days. Each sample contained the same concentration of ammonia at the start and had the same mass. They recorded the concentration of ammonia in

- soil **A** with a pH of 6.9
- soil **B** with a pH of 4.3
- a mixture of equal masses of soils **A** and **B** with its pH adjusted to 6.9

Their results are shown in **Figure 6**.

Figure 6



0 6 . 1 The scientists used units of $\mu\text{g g}^{-1}$ for the concentration of ammonia in soil.

Suggest why, in this investigation, the scientists used these units. **[2 marks]**

μg _____

g^{-1} _____

0 6 . 2 Calculate the difference in the rate of breakdown of ammonia per day between day 0 and day 2 in soil **A** and soil **B**.

Show your working and the units for your answer. **[2 marks]**

Difference in rate = _____

Question 6 continues on the next page

Turn over ►



Question 6 continues on the next page

**DO NOT WRITE ON THIS PAGE
ANSWER IN THE SPACES PROVIDED**

Turn over ►



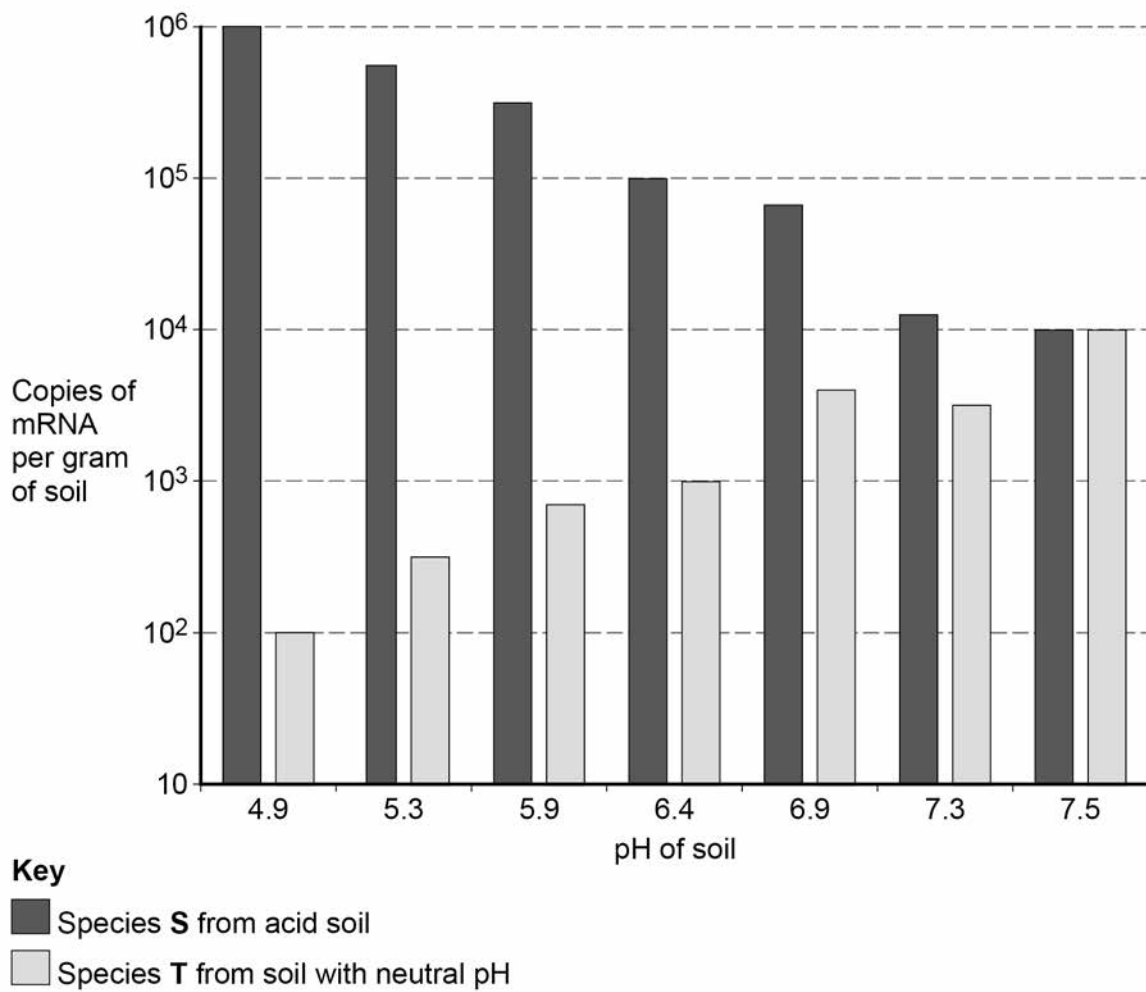
The oxidation of ammonia by nitrifying bacteria involves the enzyme ammonia monooxygenase. Each species of nitrifying bacteria has its own specific *amoA* gene that codes for production of ammonia monooxygenase.

In a second investigation, the scientists determined the expression of the *amoA* gene in two species of bacteria, **S** and **T**. Species **S** was from acid soil and species **T** was from soil with a neutral pH.

The scientists grew cultures of each species separately in soils of different pH. They determined the amount of mRNA from the *amoA* gene in each culture.

Their results are shown in **Figure 7**.

Figure 7



06.4

In which species was the number of copies of mRNA more affected by changes in soil pH from 4.9 to 7.5? Use a calculation to support your answer.

[2 marks]

Question 6 continues on the next page

Turn over ►

There are no questions printed on this page

**DO NOT WRITE ON THIS PAGE
ANSWER IN THE SPACES PROVIDED**



There are no questions printed on this page

**DO NOT WRITE ON THIS PAGE
ANSWER IN THE SPACES PROVIDED**



There are no questions printed on this page

**DO NOT WRITE ON THIS PAGE
ANSWER IN THE SPACES PROVIDED**



There are no questions printed on this page

**DO NOT WRITE ON THIS PAGE
ANSWER IN THE SPACES PROVIDED**

Copyright information

For confidentiality purposes, from the November 2015 examination series, acknowledgements of third party copyright material will be published in a separate booklet rather than including them on the examination paper or support materials. This booklet is published after each examination series and is available for free download from www.aqa.org.uk after the live examination series.

Permission to reproduce all copyright material has been applied for. In some cases, efforts to contact copyright-holders may have been unsuccessful and AQA will be happy to rectify any omissions of acknowledgements. If you have any queries please contact the Copyright Team, AQA, Stag Hill House, Guildford, GU2 7XJ.

Copyright © 2018 AQA and its licensors. All rights reserved.

